

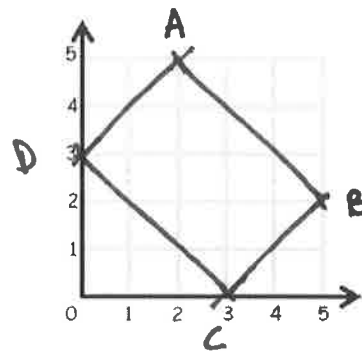


4 Question Challenge on...

## Plotting in the 1<sup>st</sup> Quadrant

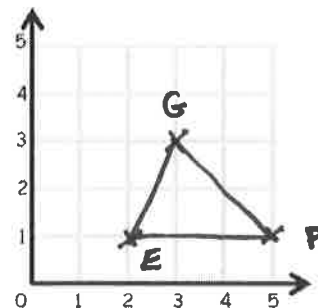
- Q1** Plot the points  
A(2, 5), B(5, 2), C(3, 0) and D(0, 3).  
Join A, B, C and D.  
What shape is ABCD?

*Rectangle*



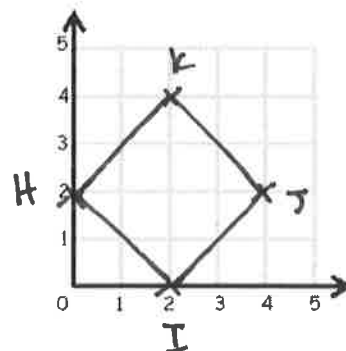
- Q2** Plot the points  
E(2, 1), F(5, 1) and G(3, 3).  
Join E, F and G.  
What shape is EFG?

*Triangle*



- Q3** Plot the points  
H(0, 2), I(2, 0), J(4, 2) and K(2, 4).  
Join H, I, J and K.  
What shape is HIJK?

*Square*



- Q4** Plot the points  
(2, 3), (4, 0), (0, 4), (8, 4), (5, 5) and (10, 4).

