




4 Question Challenge on...

## Area of a Rectangle


Calculate the area of each of the following shapes.

Q1



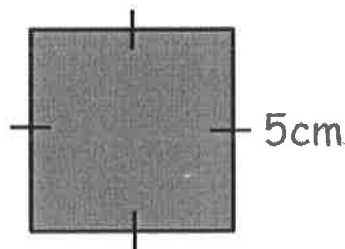
$$A = 7 \times 5 \\ = \underline{\underline{35\text{cm}^2}}$$

Q2




$$A = 8 \times 4 \\ = \underline{\underline{32\text{cm}^2}}$$

Q3



$$A = 5 \times 5 \\ = \underline{\underline{25\text{cm}^2}}$$

Q4



$$A = 10 \times 3 \\ = \underline{\underline{30\text{m}^2}}$$