




4 Question Challenge on...

Perimeter of Rectangles and Squares

Calculate the perimeter of each shape.


Q1



5cm

$$P = 5 + 5 + 3 + 3$$
$$3\text{cm} = \underline{\underline{16\text{cm}}}$$

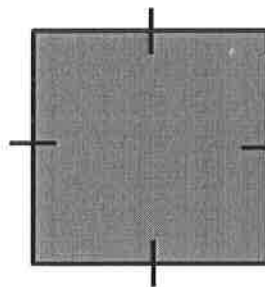
Q2



7cm

$$P = 7 + 7 + 2 + 2$$
$$2\text{cm} = \underline{\underline{18\text{cm}}}$$

Q3



4cm

$$P = 4 + 4 + 4 + 4$$
$$= \underline{\underline{16\text{cm}}}$$

Q4



4.6cm

$$P = 4.6 + 4.6 + 2.7 + 2.7$$
$$2.7\text{cm} = \underline{\underline{14.6\text{cm}}}$$