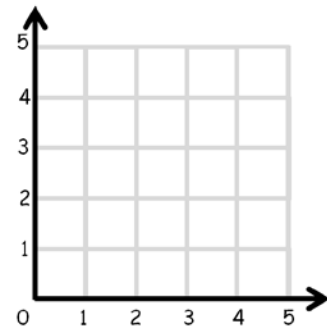




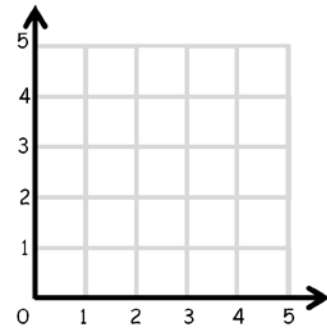
4 Question Challenge on...

Plotting in the 1st Quadrant

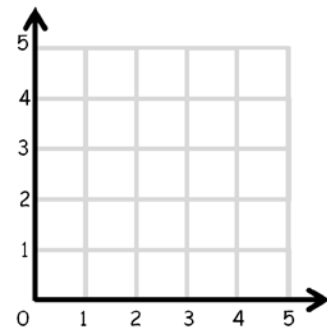
- Q1** Plot the points
 $A(2, 5)$, $B(5, 2)$, $C(3, 0)$ and $D(0, 3)$.
Join A , B , C and D .
What shape is $ABCD$?



- Q2** Plot the points
 $E(2, 1)$, $F(5, 1)$ and $G(3, 3)$.
Join E , F and G .
What shape is EFG ?



- Q3** Plot the points
 $H(0, 2)$, $I(2, 0)$, $J(4, 2)$ and $K(2, 4)$.
Join H , I , J and K .
What shape is $HIJK$?



- Q4** Plot the points
 $(2, 3)$, $(4, 0)$, $(0, 4)$, $(8, 4)$, $(5, 5)$ and $(10, 4)$.

