

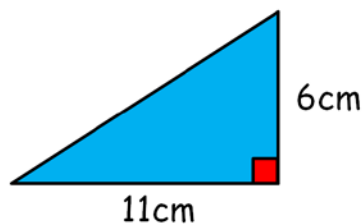


4 Question Challenge on...

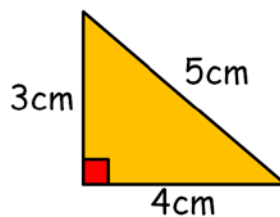
Area of a Triangle

Calculate the area of each of the following shapes.

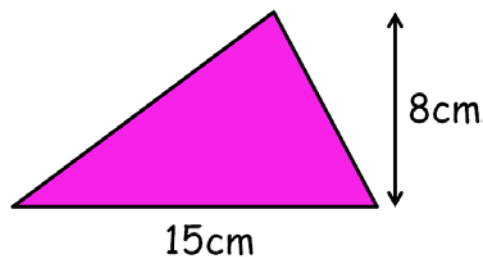
Q1



Q2



Q3



Q4

